

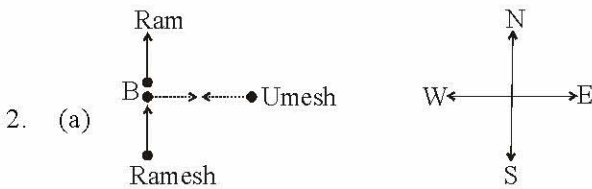
Ch 6 DIRECTION SENSE

ANSWERS AND EXPLANATIONS

EXERCISE 1

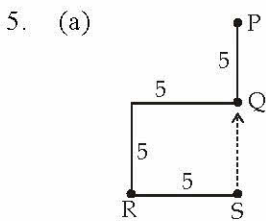
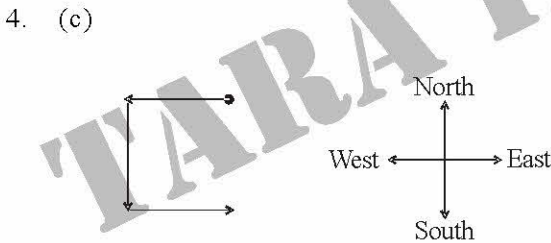
1. (e) If 12 is replaced by A, 11 is replaced by C, then 5 would be replaced by O.

Hence, the small hand would be at O



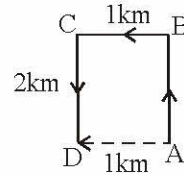
Hence, Umesh is facing West

3. (a) Satish → Sunday
Sudha → Thursday
Anil → Friday
Hence, Anil read the book on Friday



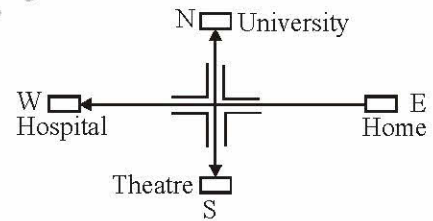
So, Raman will have to walk in North direction to reach point Q from point S.

6. (a) The Sun rises in the east. So, in morning, the shadow falls towards the west. Now, shadow of pole falls to the right of Gopal. Therefore, Gopal's right side is the west. So, he is facing South.
7. (b) Clearly, the boy rode from A to B,

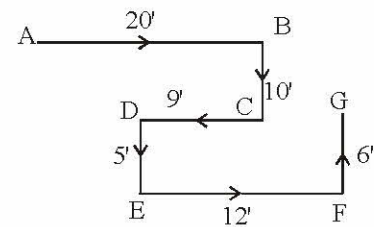


then to C and finally up to D. Since D lies to the west of A, so required distance = $AB = CD = 2$ km.

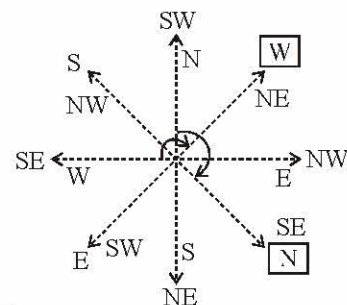
8. (a) Starting from his house in the East, Ravi moves westwards. Then, the theatre, which is to the left, will be in the South. The hospital, which is straight ahead, will be to the West. So, the University will be to the North.

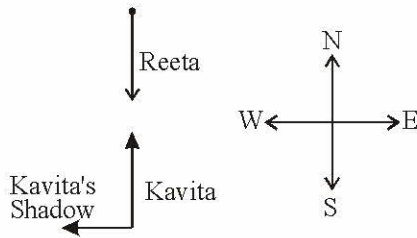


9. (c) The movements of rat are as shown in figure. Clearly, it is finally walking in the direction FG i.e. North.

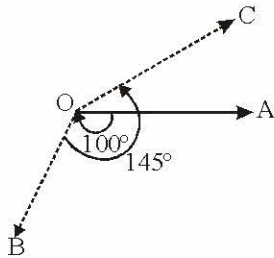


10. (c) Here, each direction moves $90^\circ + 45^\circ = 135^\circ$

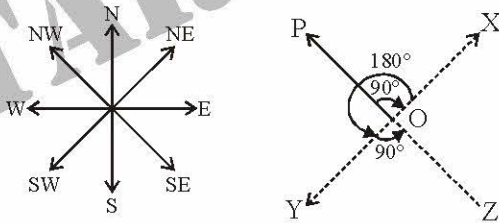




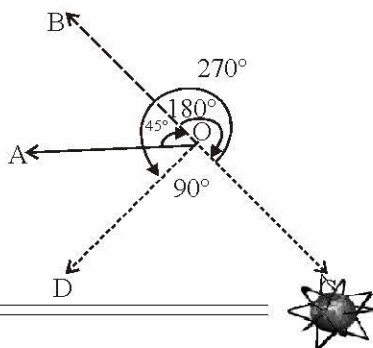
20. (b) As shown in figure, the man initially faces towards east i.e., in the direction OA. On moving 100° clockwise, he faces in the direction OB. On further moving 145° anticlockwise, he facing the direction OC. Clearly, OC makes an angle of $(145^\circ - 100^\circ)$ i.e. 45° with OA and so, the man faces in the direction North-east.



21. (d) As shown in figure, the man initially faces in the direction OP. On moving 90° clockwise, he faces in the direction OX. On further moving 180° anticlockwise, he faces in the direction OY. Finally, on moving 90° anticlockwise, he faces in the direction OZ, which is South-east.

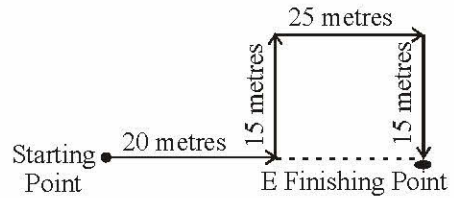


22. (d) Clearly, the man initially faces in the direction OA. On moving 45° clockwise, he faces in the direction OB. On further moving 180° clockwise, he faces in the direction OC. Finally, on moving 270° anticlockwise, he faces in the direction OD, which is South-west. Hence, the answer is (d)



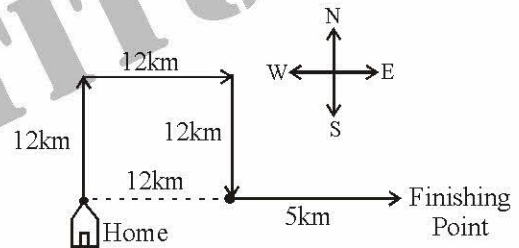
Solutions 23 to 27.

23. (d)

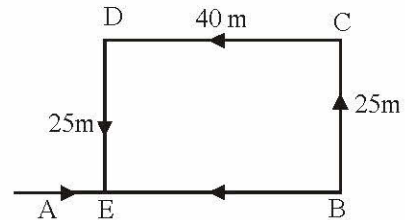


Shobha turns left after walking 20 metres towards East. Now she walks 15 metres towards North. She turns right towards East again and walks 25 metres further. Finally turning right towards South, she walks 15 metres. The distance moved towards North and towards South is same, i.e., 15 metres. So, Shobha is $20 + 25$ metres = 45 metres away from her starting point.

24. (c) $(12 \text{ km} + 5 \text{ km} = 17 \text{ km})$



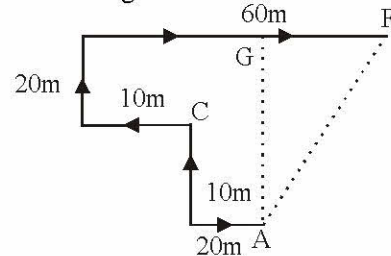
25. (d) The movements of Deepak are as shown in fig.



Clearly, $FB = DC = 40 \text{ m}$.

\therefore Deepak's distance from the starting point A = $(AB - EB) = (75 - 40) \text{ m} = 35 \text{ m}$.

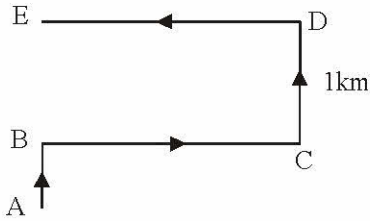
26. (d) The movements of the person are from A to F, as shown in fig.



Clearly, the final position is F which is to the north

east of the starting point A.

27. (d) The movements of Ramakant are as shown in fig.



Clearly he is finally walking in the direction DE i.e, west

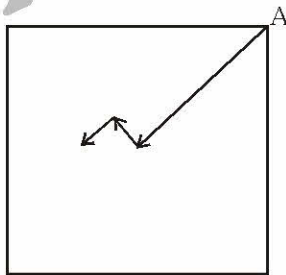
EXERCISE 2

Solutions 1 to 3 :

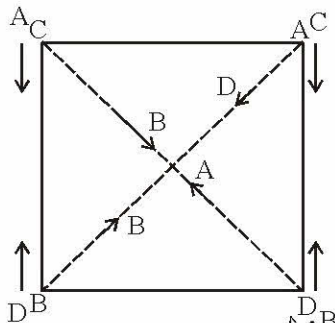
Peanuts		
	Rice	
		Vegetable

- (d) Since Wheat and Barley should be continuous, therefore, Barley will be planted in the square immediately north east of the rice field.
- (c) The square immediately west of the rice field cannot be planted with wheat.
- (d) The square immediately north east of the rice square cannot be planted with soyabeans.

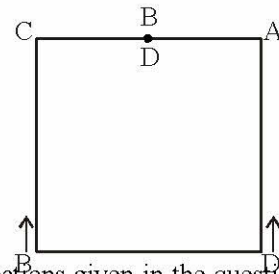
4. (c)



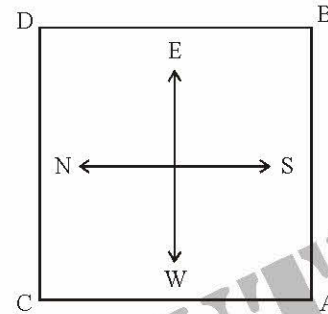
5. (a)



6. (a)

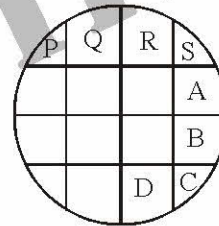


7. (d) As per directions given in the questions, the new figure formed is as follows :



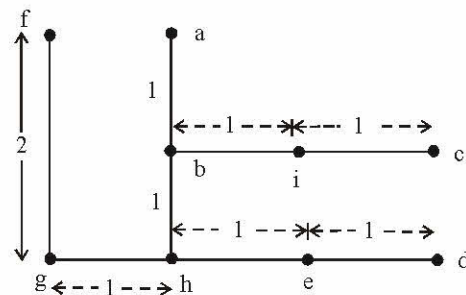
- (b) It is clear from above diagram
- (d) A is positioned north-west and P is positioned south-east.

10. (c)



Solutions 11 to 13 :

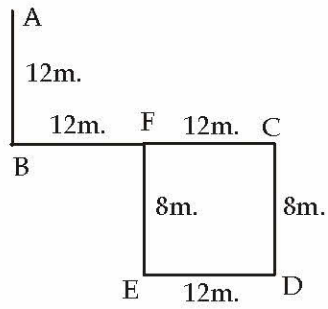
From the information given, positions of houses are as follows :



- (a) Clearly, the distance between e and g is 2 km.
- (d) From the above diagram, the distance between a and f is 1 km.
- (c) Clearly, the distance between e and i is 1 km.



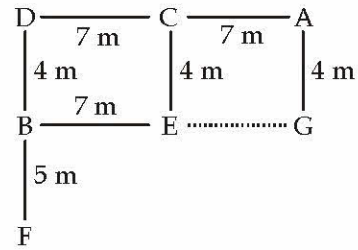
Sol. (14-15) :



14. (c)

15. (a)

Sol. (16-17):



16. (d) Points B, E, G and A, C, D are in a straight line.

17. (a) A is towards East of C.

TARA INSTITUTE

